


Multi-Task Activity Sheet



Name: _____

Class: _____



1 10 Quick Questions

* (Try not to use a calculator)

- | | | |
|--|---|---|
| 1. $\begin{array}{r} 23.6 \\ + 15.9 \\ \hline \end{array}$ | 2. $\begin{array}{r} 96.6 \\ + 178.6 \\ \hline \end{array}$ | 3. $\begin{array}{r} 2.967 \\ - 1.986 \\ \hline \end{array}$ |
| 4. $\begin{array}{r} 40.00 \\ - 26.47 \\ \hline \end{array}$ | 5. $\begin{array}{r} 156.7 \\ \times 5 \\ \hline \end{array}$ | 6. $\begin{array}{r} 42.68 \\ \times 0.9 \\ \hline \end{array}$ |
| 7. $25 + 12.6 =$ | | |
| 8. $12.5 + 9.6 - 7.8 =$ | | |
| 9. $8.6 \times 0.4 =$ | | |
| 10. $0.5 \times 0.06 =$ | | |



2 Written Language

This boy is selling lemonade to raise money, but what for? Every time a new person buys a glass of lemonade, he tells a different story as to why he needs to earn some money.

- Write five different 'stories' that he may have told these people. Make your stories as unbelievable as possible.

LEMONADE 10¢



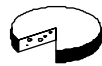
* I will write (tick box) a paragraph or ½ page or 1+ pages



3 Equivalent Fractions

Match the equivalent fractions in the box with those listed, then write one of your own.

- $\frac{1}{10} = \dots = \dots$
- $\frac{1}{5} = \dots = \dots$
- $\frac{1}{3} = \dots = \dots$
- $\frac{1}{2} = \dots = \dots$
- $\frac{2}{3} = \dots = \dots$
- $\frac{3}{4} = \dots = \dots$



$\frac{3}{30}$ $\frac{12}{18}$

$\frac{25}{50}$ $\frac{36}{48}$

$\frac{4}{20}$ $\frac{7}{21}$



4 The Living World

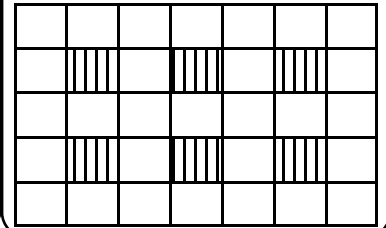
- Name this animal.
- What is this animal's country of origin?
- What is this animal's natural habitat?
- What does this animal usually eat?
- How does this animal protect itself from danger?
- What makes this animal unusual?
- Is this animal endangered?



5 Puzzle

Copy the grid. Place each number in the grid, using each number once.


18237, 76041, 35425,
59673, 2543610, 1234567,
7654321



6 Getting to know our World

- Draw the flag of Western Samoa.
- Name the capital city.
- What is the approximate population?
- What language do they speak?
- What currency do they use?
- How does Western Samoa earn money from overseas?
- How do you say 'hello' and 'good-bye' in Samoan?
- In which ocean would you find Western Samoa?
- Find two ways in which this country is similar to N.Z.
- Find two ways in which this country is different from N.Z.

flag



7 Language Skills

Copy each sentence and fill in the gaps.


- Use the words 'coarse' or 'course' only.
- The woodwork teacher said you must not use sand-paper or it will leave scratches on the wood.
 - The boats were blown off when the wind direction changed.
- Use the words 'desert' or 'dessert' only.
- The went on and on for ever.
 - May I please have some more apple pie for ?
- Use 'principal' or 'principle' only.
- There is a at stake here, that is no way to behave!
 - The or head of the school has been sick this week.



8 Media Studies

Find a sporting event article in a newspaper. Read, then answer ...

- What is the sport?
- When was the sport played?
- Who was playing?
- Where was the sport played?
- Who won?



Multi-Task Activity Sheet



Name: _____

Class: _____

1 10 Quick Questions
 * (Try not to use a calculator)


1. $50 \times 4 =$ 6. $12 \times 30 =$
 2. $7 \times 80 =$ 7. $15 \times 20 =$
 3. $20 \times 12 =$ 8. $200 \times 4 =$
 4. $4 \times 110 =$ 9. $90 \times 15 =$
 5. $30 \times 30 =$ 10. $25 \times 18 =$

2 Written Language

Behind every picture there is a story.
 What is this man doing in space ?
 What can he see ? Is he afraid ?

Describe the situation, using your best descriptive language.

* I will write (tick box) a paragraph or ½ page or 1+ pages





3 Fractions & %

Match the fractions with the equivalent % in the box.

75%
50%
33.3%
25%
66.6%


1. $\frac{1}{4}$
 2. $\frac{1}{3}$
 3. $\frac{1}{2}$
 4. $\frac{2}{3}$
 5. $\frac{3}{4}$

6. Find 50% of 345kg
 7. Find $\frac{1}{3}$ of 240mL
 8. Find $\frac{3}{4}$ of \$80.00
 9. If 75% of the class like playing tennis, what percentage do not ?
 10. In Rebecca's class there are 28 pupils. If $\frac{1}{4}$ of the class were away from school, how many pupils were away ?

4 The Living World

1. Name this animal.
 2. How many species are there ?
 3. What is this animal's country of origin ?
 4. What is this animal's natural habitat ?
 5. How does this animal survive long periods without water ?
 6. Is this animal endangered ?



5 Magic Squares

Work out the missing numbers that go in each box to make all columns, rows and diagonals add to the same number. (Note, each magic square has a different total.)

1.



2.9		
	3.6	2.9
		4.3

2.

8.2		
6.9	8.2	9.5

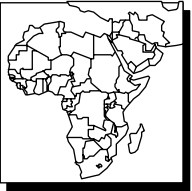
6 Media Studies

Copy the main headline in today's newspaper.
 Rewrite the headline so that it still makes sense.

7 Getting to know our World

1. Draw the flag of Somalia.
 2. Name the capital city.
 3. What is the approximate population ?
 4. What language do they speak ?
 5. What currency do they use ?
 6. On what continent is Somalia located ?
 7. Draw a simple map to show which countries border Somalia.
 8. Which ocean laps onto its shores ?
 9. Many people in Somalia are 'nomadic herders'. What does this mean?
 10. Most of Somalia is arid land. What does this mean ?




8 Language Skills


Copy these sentences placing the best adverb from the list of words below into each of the following gaps.

1. Karen slept after a hard day's work.
 2. The boy mumbled, as he was asked to leave the classroom.
 3. During Jenny's speech she explained her point of view.
 4. She bled from her cut arm.
 5. Lydia pondered before she answered.
 6. His torch shone as the battery was flat.
 7. We listened to the story.

sulkily, attentively, inaudibly, dimly, soundly, concisely, profusely




Multi-Task Activity Sheet



Name: _____

Class: _____

1 10 Quick Questions
* (Try not to use a calculator)


- $23.236 + 4.63 =$
- How many weeks in 59.5 days ?
- $120.6 \times 0.08 =$
- $35260 \div 5 =$
- How many minutes in 2 days ?
- $\$12.65 \times 9 =$
- Name this shape 
- Convert 5625L to kL
- $156 - 8 \times 9 =$
- Find 10% of \$86.50

2 Written Language

These two sailors are having the time of their lives.

- Explain how they came to be in this situation.
- Include some conversational language between the two sailors.
- Remember to start a new line each time a new person speaks.

* I will write (tick box) a paragraph or ½ page or 1+ pages



3 Multiplying & Dividing by Powers of 10

Calculate the following.

- $125 \times 100 =$
- $63 \times 1000 =$
- $1.67 \times 100 =$
- $5.6 \times 10000 =$
- $0.35 \times 100 =$
- $568 \div 10 =$
- $56.8 \div 100 =$
- $475.2 \div 1000 =$
- $9 \div 10000 =$
- $8.4 \div 1000 =$


Look at your answers above. Can you describe a simple method of multiplying and dividing by powers of 10, without having to actually do the calculation.

Answer in your homework books.

4 Planet Earth & Beyond

Match the numbers in list A with the letters in list B

List A		List B
1. A planet with 'rings'		A. September 1st
2. An orbit		B. Jupiter
3. The 1st day of winter		C. June 1st
4. The largest planet		D. Saturn
5. Vehicle designed to orbit the Earth		E. Pluto
6. The 1st day of spring		F. March 1st
7. The smallest planet		G. The path a planet takes
8. The 1st day of summer		H. Satellite
9. The 1st day of autumn		I. December 1st



5 Challenge

How many words can you make out of these words ?

MATHS IS FUN


- Letters score points as in the box.
- Add up the points for each letter, to give you a word total.
- Add up all word totals.
- Is your total over 200 points ?

M = 3, A = 1, T = 2, H = 4, S = 1,
I = 1, F = 4, U = 1, N = 2

6 Media Studies

Find a report of a crime in your newspaper.

- Write one or two paragraphs about the crime.
- What do you think the punishment should be ?



7 New Zealand History

* Match these N.Z. events, with the day, month & year they occurred, using the box at the bottom.

- Decimal currency introduced into NZ.
- Lyttelton - Christchurch road tunnel opened.
- Sir Edmund Hillary climbed Mt. Everest.
- Benmore hydro-electric power station opened.
- James Cook sighted New Zealand (near Gisborne).
- Peter Snell sets world mile record of 3 min 54.4 sec.

7th October 1769, 29th May 1953, 26th January 1962
27th February 1964, 15th March 1965, 10th July 1967



8 Language Skills

Sometimes expressions have double meanings, and mean something different to what is actually said.

EXAMPLE: *I've got a bone to pick with you!* means you have a disagreement to settle with someone.

What do you think these expressions mean ?

- Don't beat around the bush.*
- I feel like a box of birds.*
- Mind your P's and Q's.*
- You'll pay through the nose for that.*
- I've been burning the candle at both ends.*

